

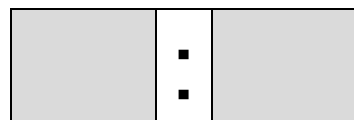
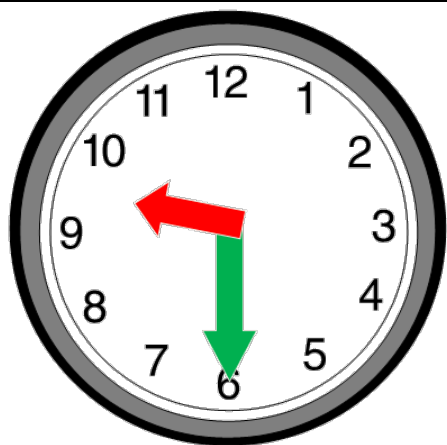
Due: October 24, 2014

Grade 1: Math Checkpoint Assignment #2

Objectives:


- **CCSS.Math.Content.1.MD.B.3:** Tell and write time in hours and half-hours using analog and digital clocks.


Task 1: What time does the clock show?



Task 2: How did you find the minutes for the time above? (*Learning Coach: Write the student's dictated response.*)

Task 3: Label each clock as analog or digital.



Task 4: Which way do the hands on a clock move? Place a “X” next the clock you choose.	
